



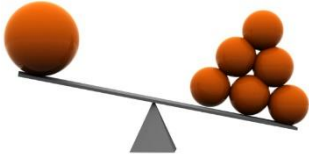


School Name _____

Name _____

Class _____

How much can you carry?

Answer the following questions

<p>1.</p>	<p>Circle the correct answer</p> <ul style="list-style-type: none">• Surbhi is heavier / lighter than Mayank.• Mayank is heavier / lighter than Surbhi.	<p>Surbhi</p> <p>Mayank</p> 
<p>2.</p>	<p>Circle the correct answer</p> <ul style="list-style-type: none">• Which side of scales is heavier? (right side/left side)• Which side of scales is lighter? (right side/left side)	
<p>3.</p>	<p>Can you tell why the seesaw turned this way?</p>	
<p>4.</p>	<p>Which one is the correct position of the seesaw?</p>	<p>i) </p> <p>ii) </p>