

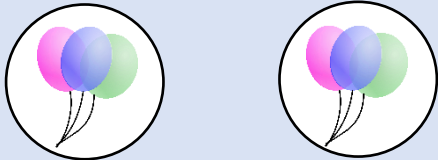
School Name _____

Name _____


Class _____

Count the groups


Fill in the blank



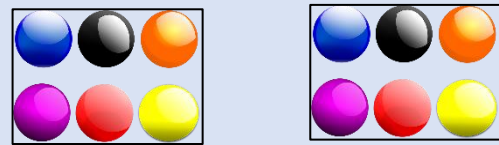
2 groups of 3



___ groups of ___



___ groups of ___




___ groups of ___




___ group of ___



___ groups of ___



___ groups of ___



___ groups of ___