

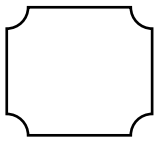
School Name _____

Name _____

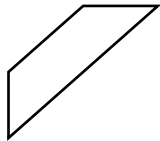
Class _____

Geometry

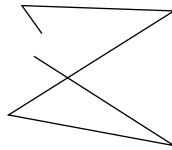
1. Separate the following as closed or open figures:



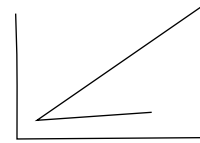
a)




b)



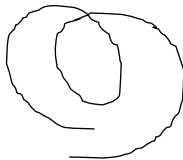
c)



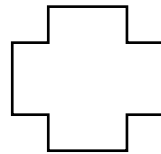
d)



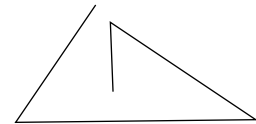
e)



f)



g)

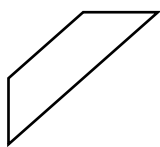


h)

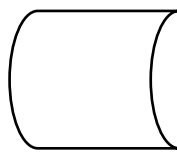
2. Which of the following is/are a polygon:



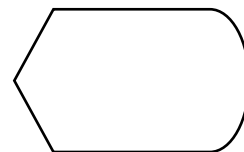
a)




b)



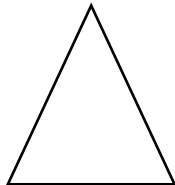
c)



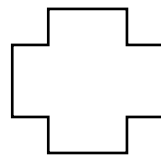
d)



e)



f)



g)



h)