

Data Handling Set-6

Name _____ Date _____

Class _____ Roll No _____



School Name _____

Fill in the blanks.

- What is line graph?



- What is bar graph?

- What is pie chart?

- If a symbol  represent 20 apple in a fruit basket. Then  represents how much apple? _____

- What is information and data?

- What is tally marks and how represent an observation which is 9 times occurring in tally marks?

- If a symbol  represent 13 pencil in a box. Then  represents how much pencil? _____

- The number of Science books sold by a shopkeeper on six consecutive days is shown below :

Days	Sunday	Monday	Tuesday	Thursday	Friday	Saturday
Number of books sold	30	20	35	15	25	45

Draw the bar graph.