



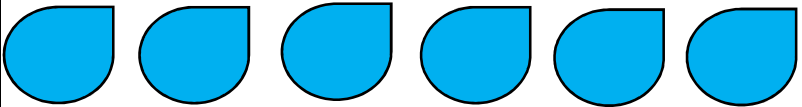
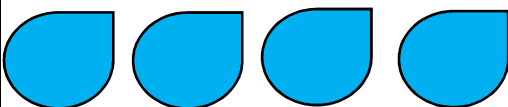

Pet Shop

Name _____ Date _____

Class _____ Roll No _____

School Name _____

The number of pet animals sold in a month is shown in below table.
Each symbol represents 7 pets.

Animals in a pet shop	Number of animals sold in a month
Cat	
Sheep	
Dog	
Rat	
Rabbit	

- Which pet was sold the most? _____
- How many more dogs were sold as compared to cats?

- Which pet was sold the least? _____
- What is the difference between the number of pets which is highest in number and lowest in number sold in month?

- Find out the number of dogs sold in month. _____
- Multiply the number of cats and rats sold in month.
